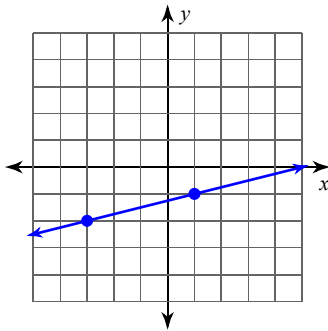


Finding slope

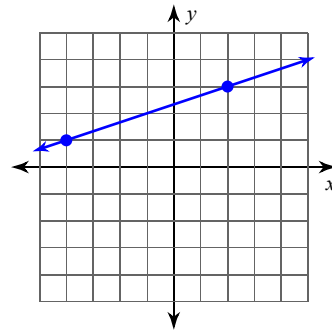
Date _____ Period _____

Find the slope of each line.

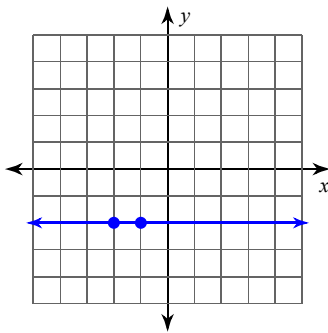
1)



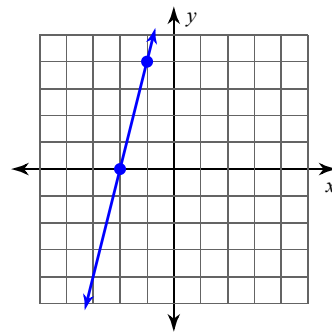
2)



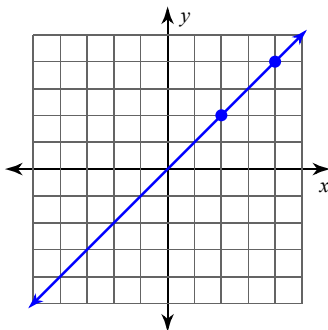
3)



4)



5)



Find the slope of the line through each pair of points.

6) $(19, -20), (15, -5)$

7) $(-16, -6), (1, 1)$

8) $(3, -3), (-6, -7)$

9) $(-5, -6), (18, -14)$

10) $(-20, -7), (-19, -19)$

11) $(-5, -4), (7, -10)$

12) $(-19, 18), (-10, 8)$

13) $(6, 20), (12, 12)$

14) $(-13, -6), (13, -7)$

15) $(4, -10), (15, 20)$